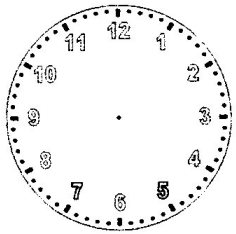


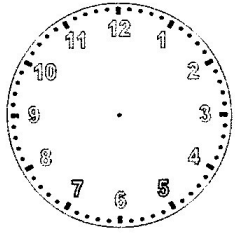
L'OROLOGIO



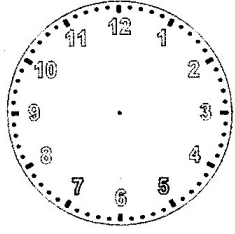
Disegna le lancette in modo che ciascun orologio indichi la stessa ora dell'orologio digitale.



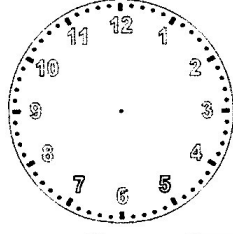
2:40



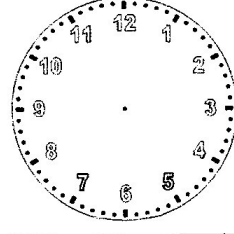
15:05



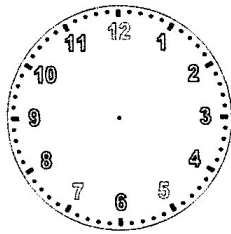
5:15



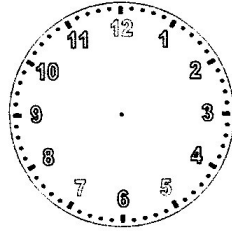
14:25



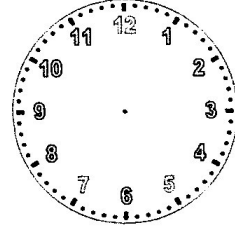
7:10



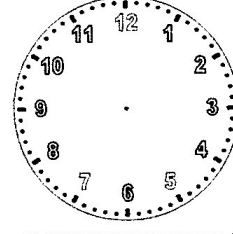
18:50



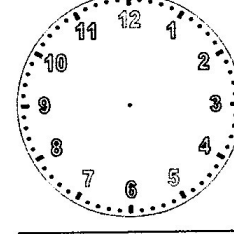
22:45



13:20

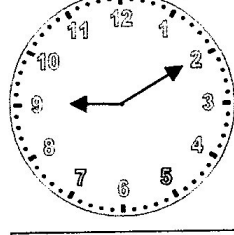
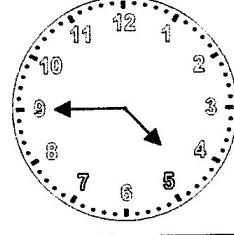
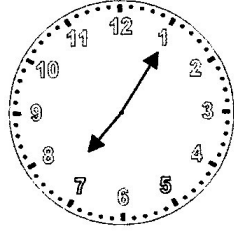
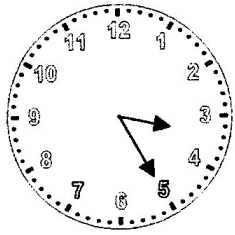
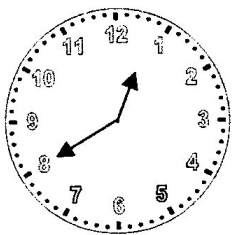


4:55



0:30

Scrivi che ora è sugli orologi digitali osservando le lancette.
Questi orologi segnano l'ora dopo la mezzanotte. (a.m.)



Scrivi che ora è sugli orologi digitali osservando le lancette.
Questi orologi segnano l'ora dopo mezzogiorno. (p.m.)

